

Belajar Ten Frame

Yuk isi ten frame sesuai dengan angka yang tertera pada kotak!

1

●				

9

5

3

10

6

Belajar Ten Frame

Yuk beri garis yang sesuai antara ten frame dengan angka!

1

5

8


6

3


10

Belajar Ten Frame


Yuk isi ten frame kemudian tulis angka pada kotak!




$$4 + 6 = 10$$



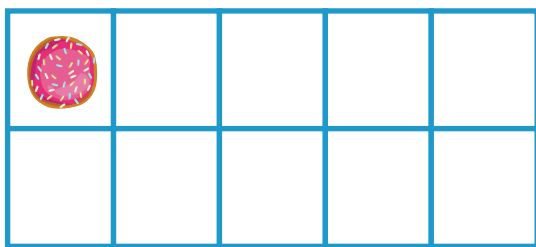
$$2 + \square = 10$$




$$5 + \square = 10$$



$$6 + \square = 10$$



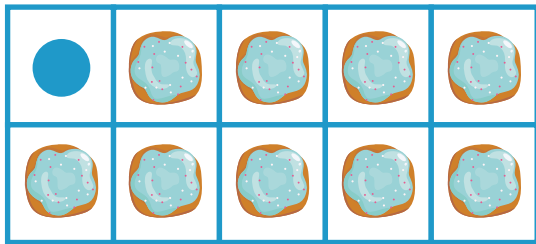
$$1 + \square = 10$$



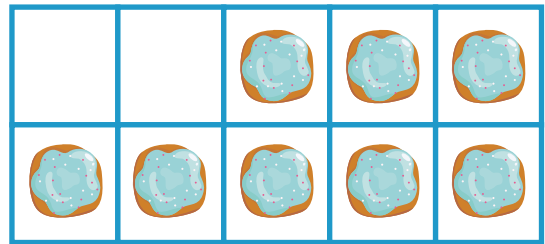
$$8 + \square = 10$$

Belajar Ten Frame

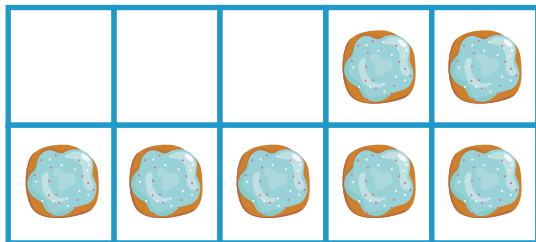
Yuk isi ten frame kemudian tulis angka pada kotak!



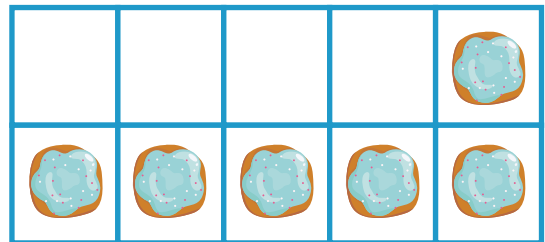
$$\boxed{1} + \boxed{9} = \boxed{10}$$




$$\boxed{} + \boxed{8} = \boxed{10}$$



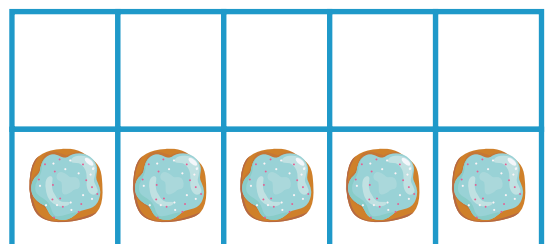
$$\boxed{} + \boxed{7} = \boxed{10}$$



$$\boxed{} + \boxed{6} = \boxed{10}$$




$$\boxed{} + \boxed{1} = \boxed{10}$$




$$\boxed{} + \boxed{5} = \boxed{10}$$

Belajar Ten Frame!


Yuk menghitung ten frame dan tulis angka pada kotak!




$$\boxed{6} - \boxed{2} = \boxed{4}$$




$$\boxed{9} - \boxed{4} = \boxed{}$$




$$\boxed{5} - \boxed{4} = \boxed{}$$



$$\boxed{7} - \boxed{3} = \boxed{}$$



$$\boxed{3} - \boxed{2} = \boxed{}$$



$$\boxed{8} - \boxed{6} = \boxed{}$$